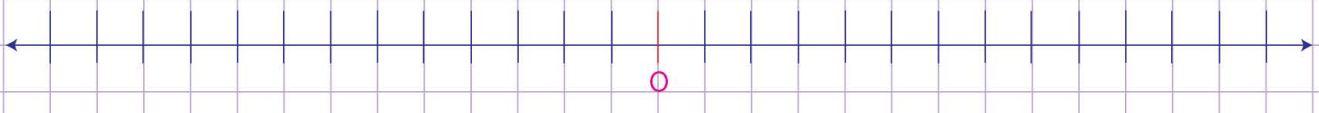
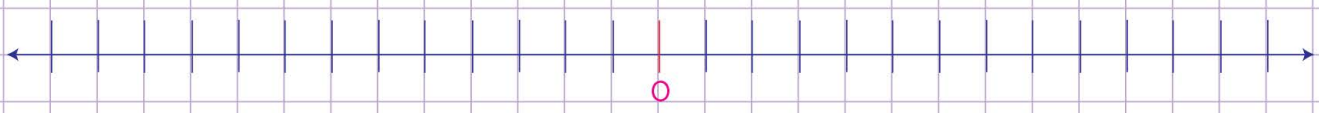
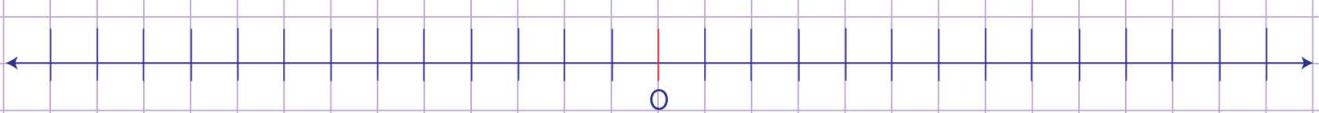
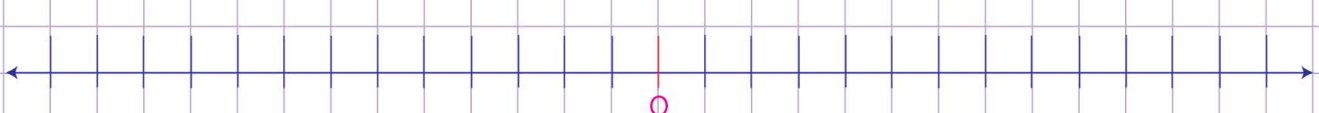
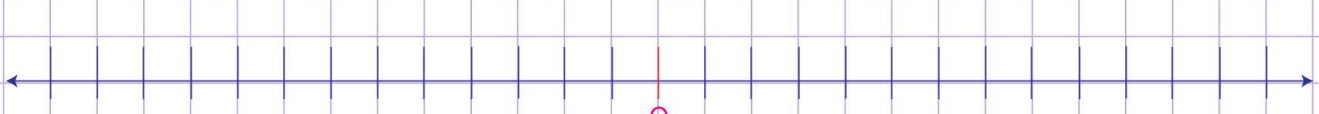



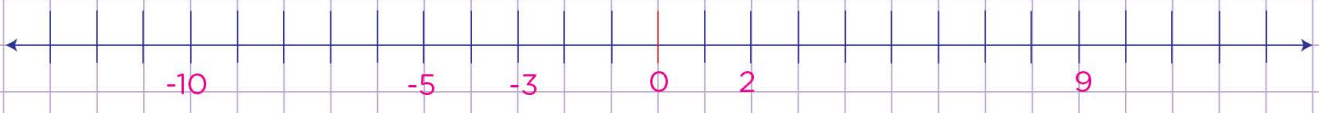
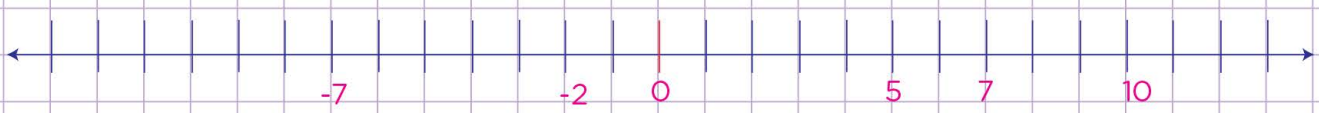
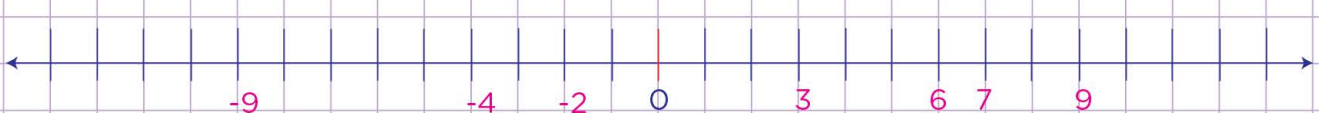
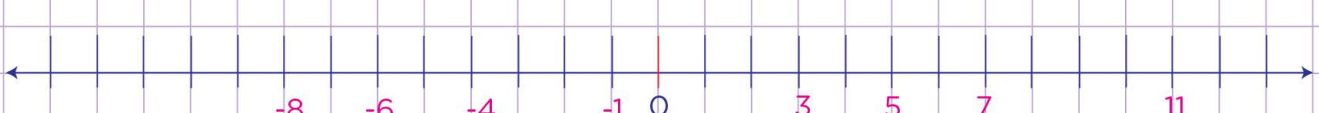
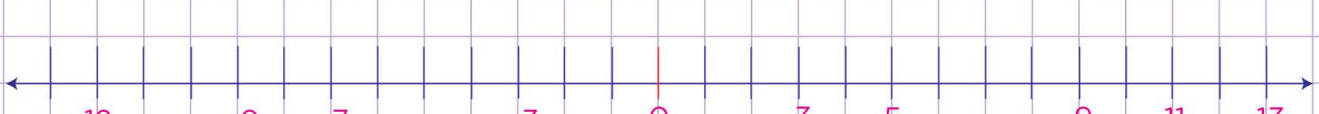
Name: Class:

Integers on number lines.

1.	Write these integers on the number line: -10, -5, -3, 0, 2, 9
	
2.	Write these integers on the number line: -7, -2, 0, 7, 9, 10
	
3.	Write these integers on the number line: -9, -4, -2, 3, 6, 7, 9
	
4.	Write these integers on the number line: -8, -6, -4, -1, 3, 5, 7, 11
	
5.	Write these integers on the number line: -12, -9, -7, -3, 0, 3, 5, 9, 11, 13
	
6.	Write these integers on the number line: 6, 9, 8, -7, -8, 7, 10, 1
	

Name: Class:

Integers on number lines.

1.	Write these integers on the number line: -10, -5, -3, 0, 2, 9
	
2.	Write these integers on the number line: -7, -2, 0, 5, 7, 10
	
3.	Write these integers on the number line: -9, -4, -2, 3, 6, 7, 9
	
4.	Write these integers on the number line: -8, -6, -4, -1, 3, 5, 7, 11
	
5.	Write these integers on the number line: -12, -9, -7, -3, 0, 3, 5, 9, 11, 13
	
6.	Write these integers on the number line: 6, 9, 8, -7, -8, 7, 10, 1
	