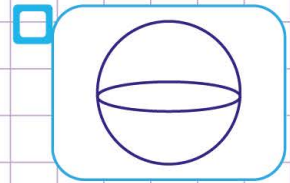
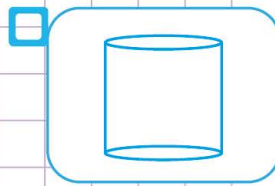
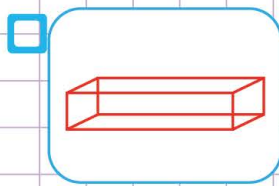
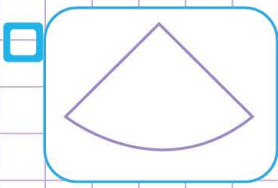


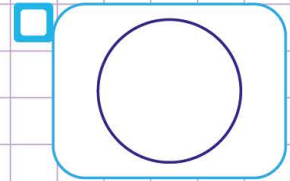
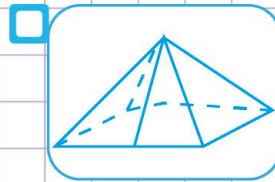
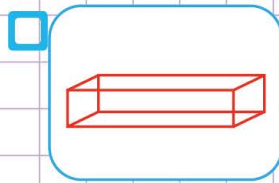
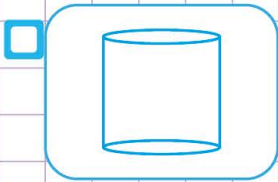
Name: Class:

Which figure is being described?

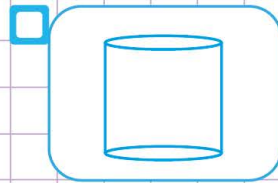

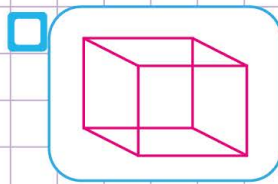
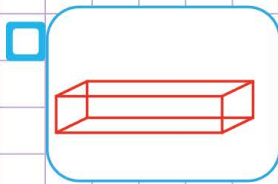
1. Jannick made a 3-dimensional figure out of a cardboard. The figure had six rectangular faces. Which figure could Jannick have made ?



2. Bruce made a 3-dimensional figure out of a cardboard. The figure had 2 round faces at the top and at the base. Which figure could Bruce have made ?



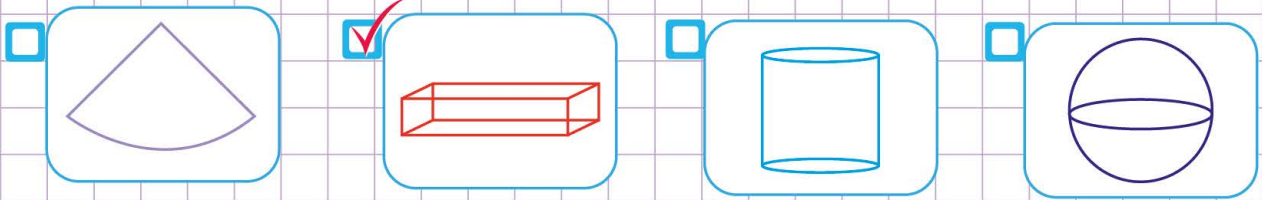
3. Sindy's friend Lea made a 3-dimensional figure out of a wood. The figure had 6 square faces. Which figure could Lea have made ?



Name: Class:

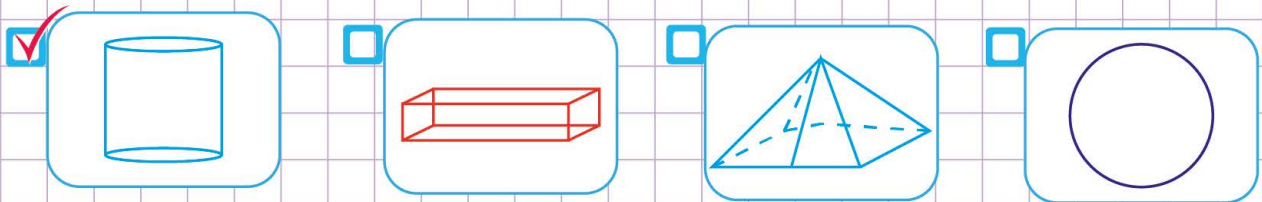
Which figure is being described?

1. Jannick made a 3-dimensional figure out of a cardboard. The figure had six rectangular faces. Which figure could Jannick have made ?



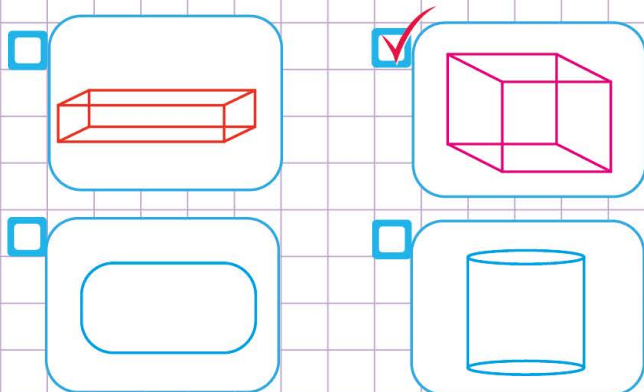
Look for the figure that has 6 rectangular faces from the figures above.

2. Bruce made a 3-dimensional figure out of a cardboard. The figure had 2 round faces at the top and at the base. Which figure could Bruce have made ?



Look for the figure that has 2 round faces at the top and at the base from the figures above.

3. Sindy's friend Lea made a 3-dimensional figure out of a wood. The figure had 6 square faces. Which figure could Lea have made ?



Look for the figure that has 6 squares faces a from the figures above.