


Name: Class:

Write a ratio using a fraction

Write the correct ratios for each situation below. Write your ratios using /

1.




What is the ratio of planes to horses?

What is the ratio of rockets to all toys?

What is the ratio of horses to rockets and planes?

2.



What is the ratio of moons to stars?

What is the ratio of moons to suns?


What is the ratio of stars to moons and suns?

Name: Class:

Write a ratio using a fraction

Write the correct ratios for each situation below. Write your ratios using /

1.



What is the ratio of planes to horses?

$4/6$


What is the ratio of rockets to all toys?

$5/15$

What is the ratio of horses to rockets and planes?

$6/9$

2.



What is the ratio of moons to stars?

$6/4$

What is the ratio of moons to suns?

$6/8$

What is the ratio of stars to moons and suns?

$4/14$