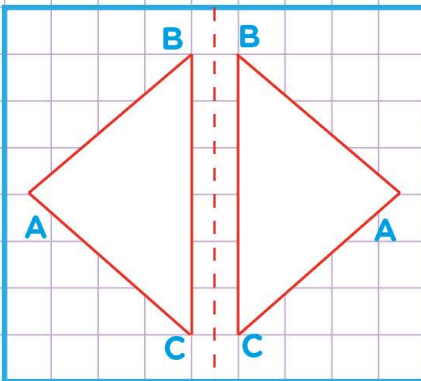


Name: Class:

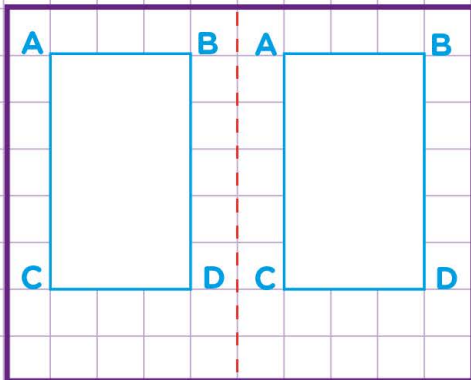
Reflection, rotation, and translation

1. Tell how each figure below was transformed. Write translation, rotation or reflection.



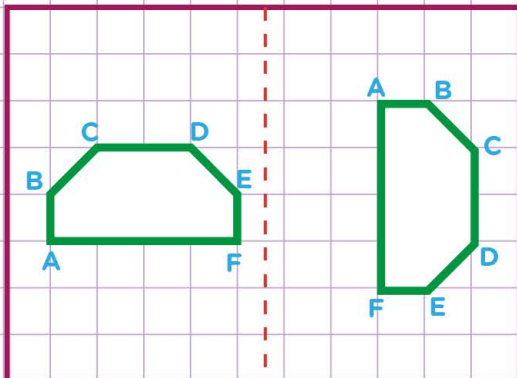
The figure has been transformed by?

2.



The figure has been transformed by?

3.

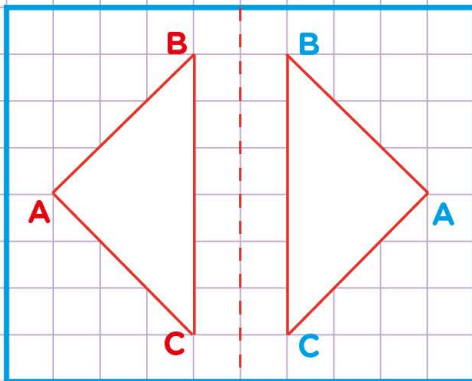


The figure has been transformed by?

Name: Class:

Reflection, rotation, and translation

1. Tell how each figure below was transformed. Write translation, rotation or reflection.



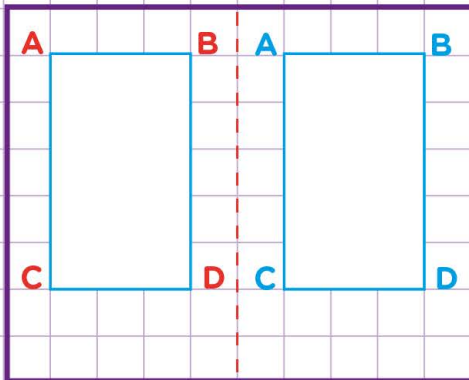
The figure has been transformed by?

Reflection

A reflection flips the figure over a line to create a mirror image.

So, this is reflection.

2.



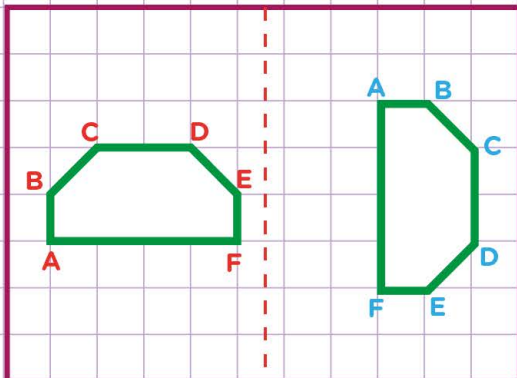
The figure has been transformed by?

Translation

A translation slides the figure to a different location.

So, this is Translation.

3.



The figure has been transformed by?

Rotation

A rotation turns the figure around a point.

So, this is Rotation.