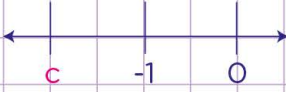


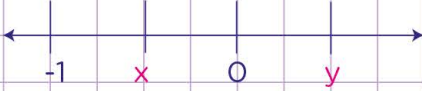
Name: Class:

Rational numbers: find the sign

Numbers to the left of zero are negative while numbers to the right of zero are positive.

Find the signs of the unknown numbers shown on the number lines.

1.  Is c positive or negative?


2.  Is x and y positive or negative?

 and

3.  Is x, y and z positive or negative?

, and

4.  Is a positive or negative?

5. 

Is b and c positive or negative?

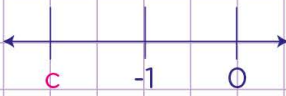
 and

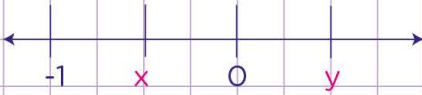
Name: Class:


Rational numbers: find the sign


Numbers to the left of zero are negative while numbers to the right of zero are positive


Find the signs of the unknown numbers shown on the number lines.

1. 
is c positive or negative?
c is negative

2. 
is x and y positive or negative?
x is negative and y is positive

3. 
is x, y and z positive or negative?
x is negative, y is positive and z is positive

4. 
is a positive or negative?
a is positive

5. 
is b and c positive or negative?
b is negative and c is negative