

Name: ..... Class: .....

Identify and classify polygons

1. How many sides does a pentagon have?

- 3 sides       2 sides       8 sides       5 sides

2. How many sides does a triangle have?

- 3 sides       2 sides       8 sides       5 sides

3. How many sides does an hexagone have?

- 5 sides       4 sides       6 sides       7 sides

4. How many sides does an octagone have?

- 3 sides       8 sides       9 sides       1 sides

Is the shape below a polygon?



- Yes       No

Is the shape below a polygon?



- Yes       No

Is the shape below a polygon?



- Yes       No

Is the shape below a quadrilateral?



- Yes       No

Is the shape below a quadrilateral?



- Yes       No

Name: ..... Class: .....

Identify and classify polygons

1. How many sides does a pentagon have?

- 3 sides    
  2 sides    
  8 sides    
  5 sides

2. How many sides does a triangle have?

- 3 sides    
  2 sides    
  8 sides    
  5 sides


3. How many sides does an hexagone have?

- 5 sides    
  4 sides    
  6 sides    
  7 sides

4. How many sides does an octagone have?


- 3 sides    
  8 sides    
  9 sides    
  1 sides

Is the shape below a polygon?




Yes    
  No

Is the shape below a polygon?




Yes    
  No

Is the shape below a polygon?




Yes    
  No

Is the shape below a quadrilateral?



Yes    
  No

Is the shape below a quadrilateral?



Yes    
  No