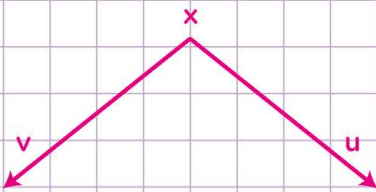


Name: Class:

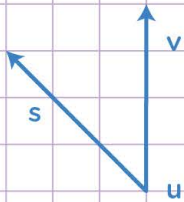
Name angles

Look at the following angles below and name each of these angles. Show the work.

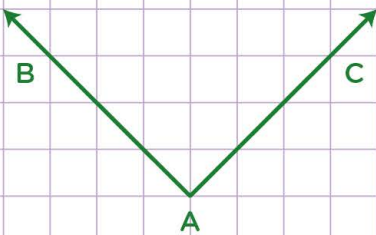
1. Name this angle in 3 different ways.



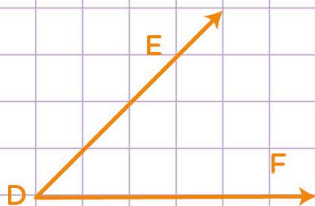
2. Name this angle in 2 different ways.



3. Name this angle in 2 different ways.



4. Name this angle in 3 different ways.

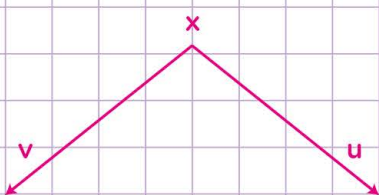


Name: Class:

Name angles

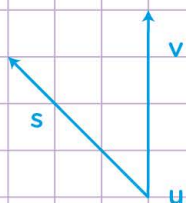
Look at the following angles and name each of them in different ways.

1. Name this angle in 3 different ways.



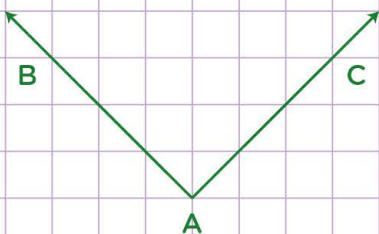
- ▶ $\angle x$
- ▶ $\angle vxu$
- ▶ $\angle uxv$

2. Name this angle in 2 different ways.



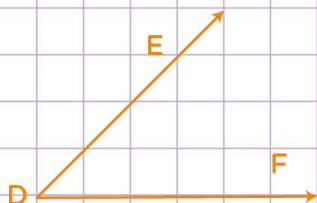
- ▶ $\angle suv$
- ▶ $\angle vus$

3. Name this angle in 2 different ways.



- ▶ $\angle BAC$
- ▶ $\angle CAB$

4. Name this angle in 3 different ways.



- ▶ $\angle D$
- ▶ $\angle FDE$
- ▶ $\angle EDF$