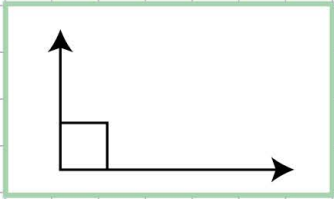


Name: Class:

Classify angles

1. Is the angle below right, obtuse, reflex or acute?



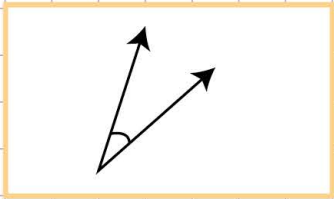
acute

obtuse

right

reflex

2. Is the angle below right, obtuse, straight or acute?



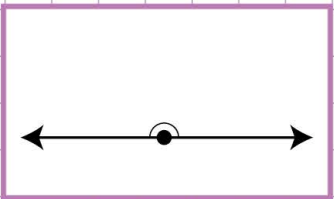
straight

right

obtuse

acute

3. Is the angle below right, obtuse, straight or acute?



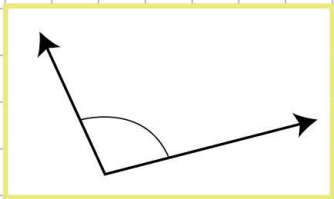
acute

right

straight

obtuse

4. Is the angle below right, obtuse, straight or acute?



acute

right

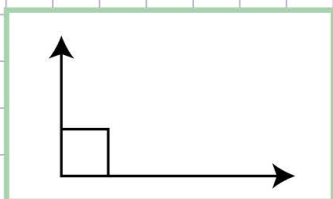
obtuse

straight

Name: Class:

Classify angles

1. Is the angle below right, obtuse, reflex or acute?



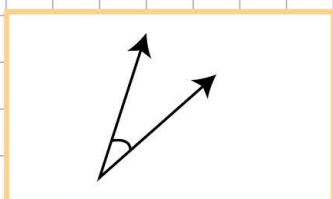
acute

obtuse

right

reflex

2. Is the angle below right, obtuse, straight or acute?



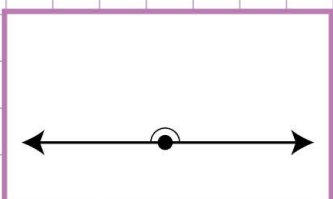
straight

right

obtuse

acute

3. Is the angle below right, obtuse, straight or acute?



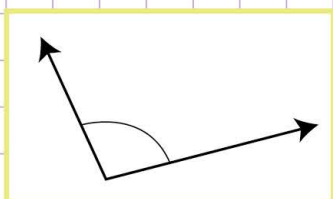
acute

right

straight

obtuse

4. Is the angle below right, obtuse, straight or acute?



acute

right

obtuse

straight