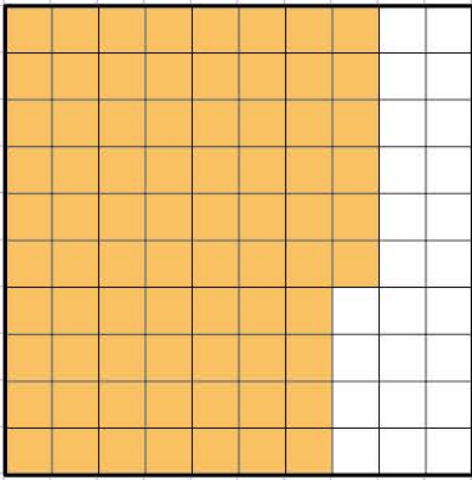


Name: Class:


Which decimal number is illustrated ?

In each case tick and write the correct decimal answer in word.



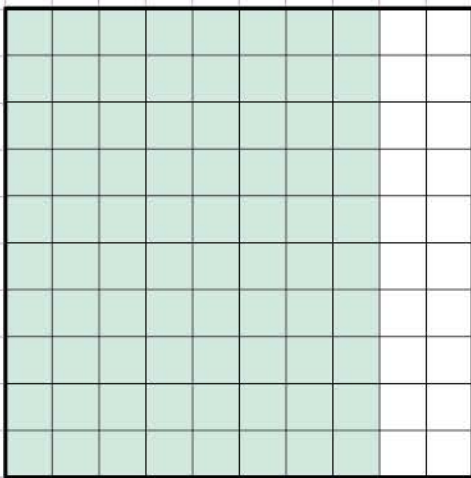
- 0.70
 0.76
 0.66

► This grid shows _____



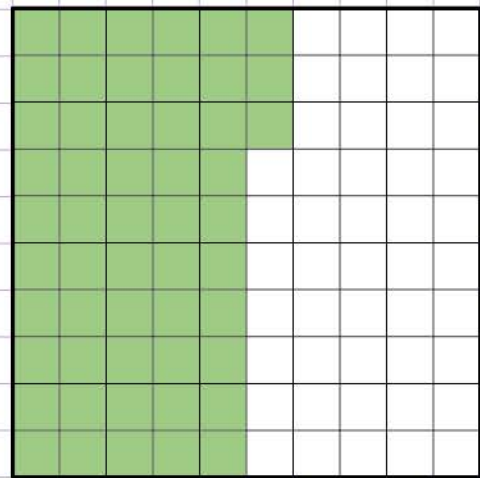
- 0.90
 0.79
 0.99

► This grid shows _____



- 0.8
 0.08
 0.7

► This grid shows _____



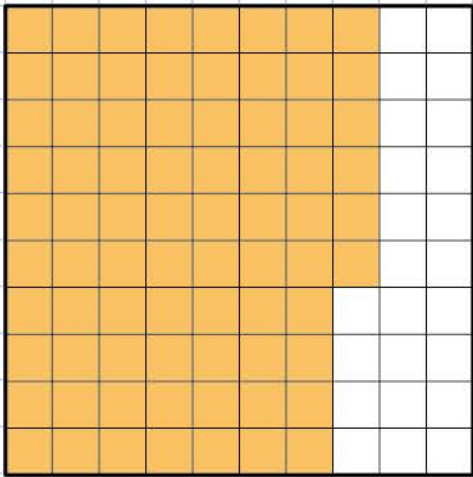
- 0.53
 0.03
 1.53

► This grid shows _____

Name: Class:


Which decimal number is illustrated ?

In each case tick and write the correct decimal answer in word.



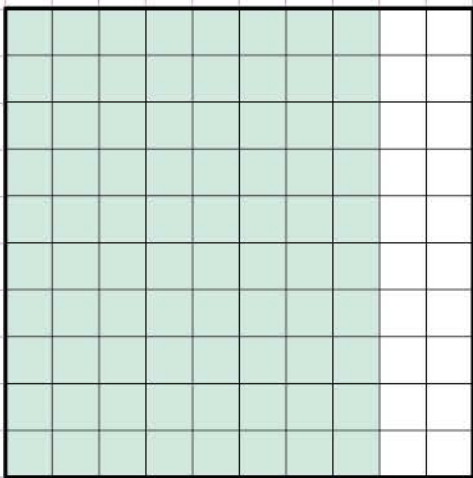
- 0.70
 0.76
 0.66

► This grid shows seventy-six hundredths.




- 0.90
 0.79
 0.99

► This grid shows ninety-nine hundredths.



- 0.8
 0.08
 0.7

► This grid shows eighty hundredths.



- 0.53
 0.03
 1.53

► This grid shows fifty-three hundredths.