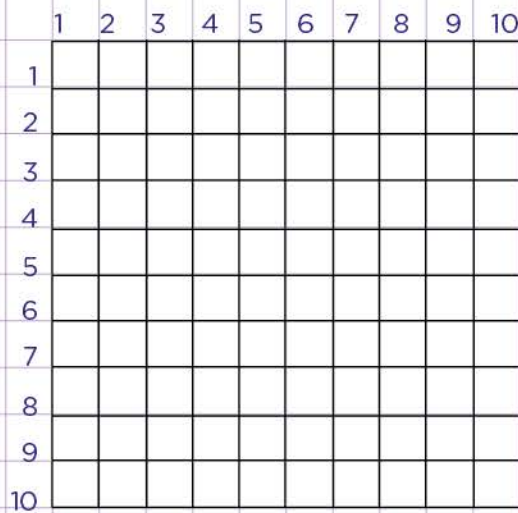


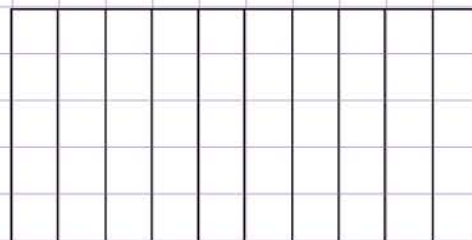
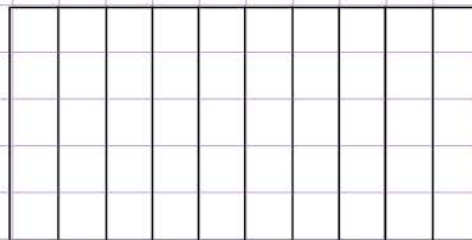
Name: ..... Class: .....

Model decimals and fractions

a. Display  $\frac{8}{100}$  by coloring the model below.



b. Display 1.5 by coloring the model.

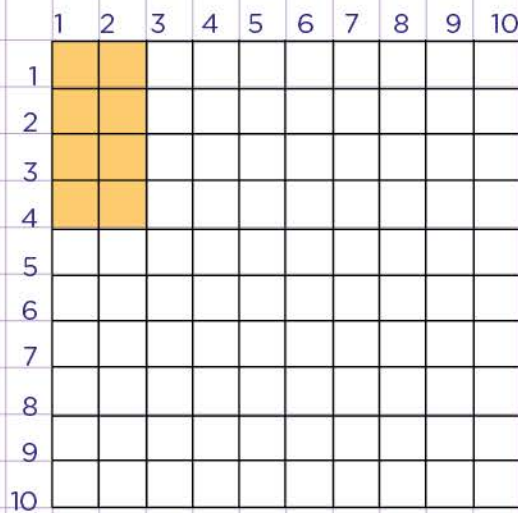


Name: ..... Class: .....

Model decimals and fractions

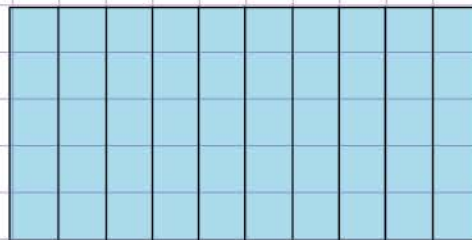
a. Display  $\frac{8}{100}$  by coloring the model below.

The model has 10 rows  
and 10 columns.  
So there are  $10 \times 10 =$   
100 parts.  
Shade or color any 8  
parts to show  $\frac{8}{100}$



b. Display 1.5 by coloring the model.

Let's start by writing  
1.5 as a mixed  
number whose part has  
a denominator  
of 10.



$1.5 = 1\frac{5}{10}$

Now, color 1 whole of  
the model and  
color any other 5 parts  
to show  $\frac{5}{10}$

