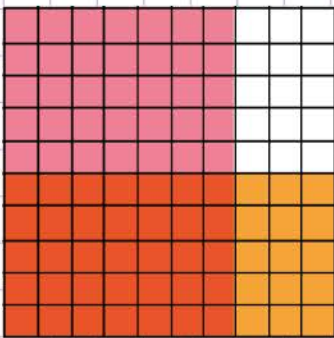


Name: Class:

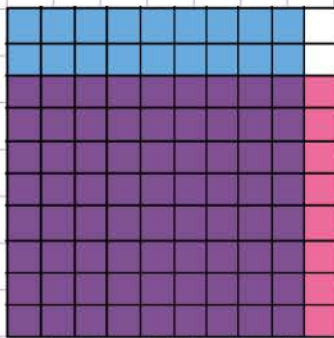
Multiply decimals using grids

Multiply the following decimals using the grids below.

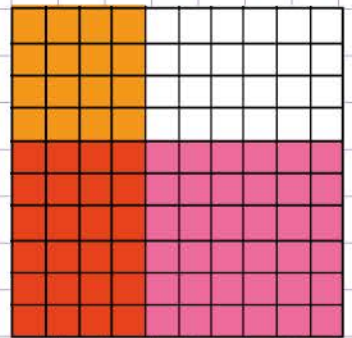
$0.7 \times 0.5 =$ _____



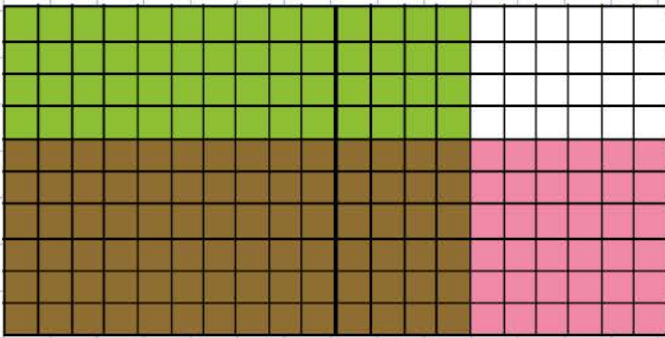
$0.9 \times 0.8 =$ _____



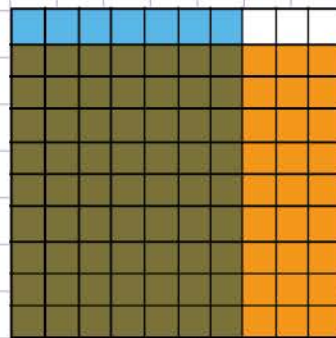
$0.4 \times 0.6 =$ _____



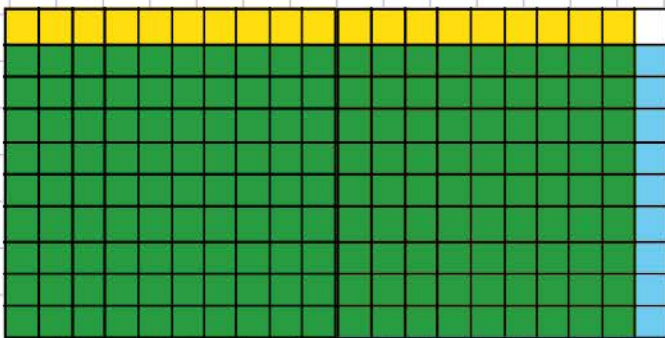
$1.4 \times 0.6 =$ _____



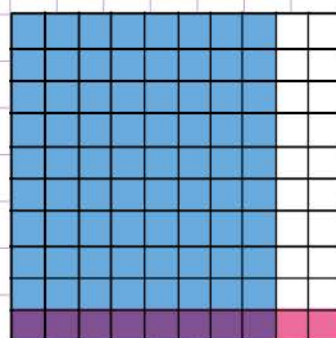
$0.7 \times 0.9 =$ _____



$1.9 \times 0.9 =$ _____



$0.8 \times 0.1 =$ _____

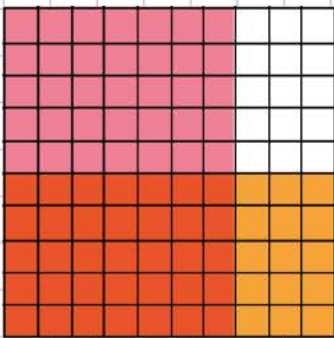


Name: Class:

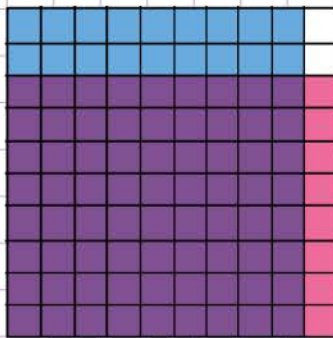
Multiply decimals using grids

Multiply the following decimals using the grids below.

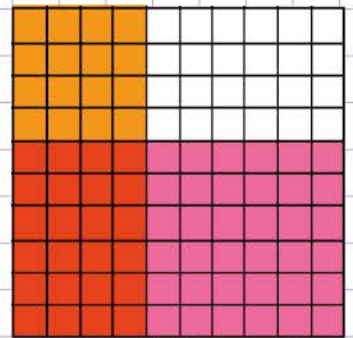
$0.7 \times 0.5 = \underline{0.35}$



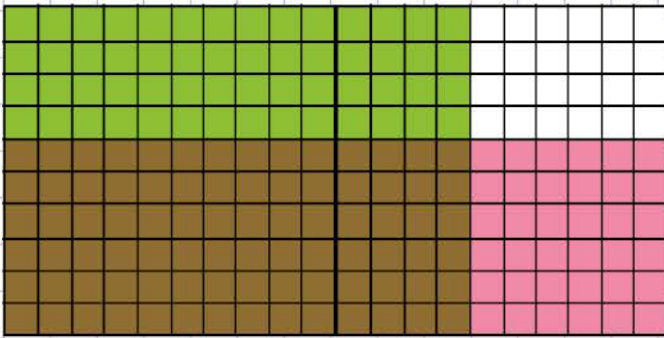
$0.9 \times 0.8 = \underline{0.72}$



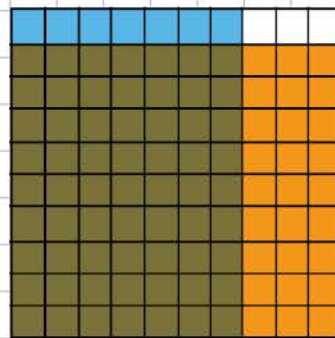
$0.4 \times 0.6 = \underline{0.24}$



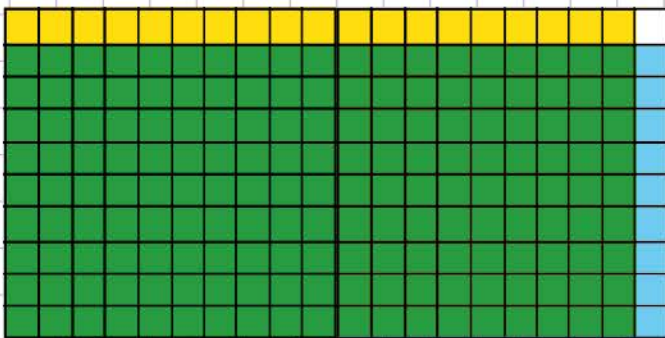
$1.4 \times 0.6 = \underline{0.84}$



$0.7 \times 0.9 = \underline{0.63}$



$1.9 \times 0.9 = \underline{1.71}$



$0.8 \times 0.1 = \underline{0.08}$

