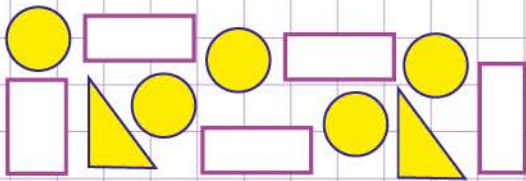


Name: Class:

Write a ratio

Write the correct ratios for each situation below. Write your ratios using colon (:).

a.



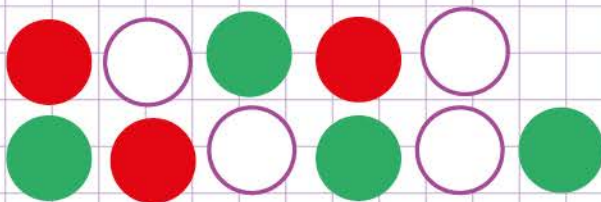
What is the ratio of circles to rectangles?

What is the ratio of circles to triangles?

What is the ratio of triangles to circles?

What is the ratio of rectangles to circles and triangles?

b.



What is the ratio of red to total colours?

What is the ratio of white to red?

What is the ratio of red to green?

What is the ratio of green to total colours?

What is the ratio of red to white?

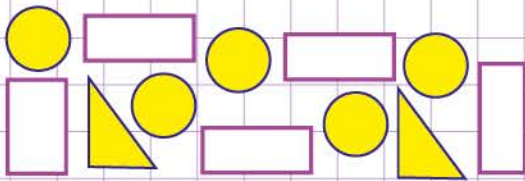
What is the ratio of green to white?

Name: Class:

Write a ratio

Write the correct ratios for each situation below. Write your ratios using colon (:).

a.



What is the ratio of circles to rectangles?

5 : 5

What is the ratio of circles to triangles?

5 : 2

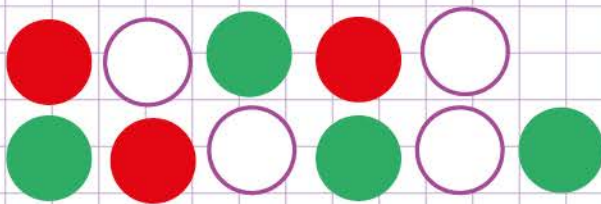
What is the ratio of triangles to circles?

2 : 5

What is the ratio of rectangles to circles and triangles?

5 : 7

b.



What is the ratio of red to total colours?

3 : 11

What is the ratio of white to red?

4 : 3

What is the ratio of red to green?

3 : 4

What is the ratio of green to total colours?

4 : 11

What is the ratio of red to white?

3 : 4

What is the ratio of green to white?

4 : 4