


Name: ..... Class: .....


Identify trapezoids

Is this polygon a trapezoid?




Yes    No

Is this polygon a trapezoid?



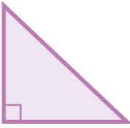
Yes    No

Is this polygon a trapezoid?



Yes    No

Is this polygon a trapezoid?



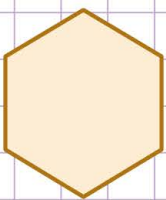
Yes    No

Is this polygon a trapezoid?



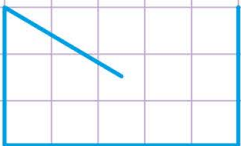
Yes    No

State whether the following shapes are **trapezoid** or **not** and **why?**



Trapezoid or not?

Why?



Trapezoid or not?

Why?




Trapezoid or not?

Why?

Name: ..... Class: .....


Identify trapezoids

Is this polygon a trapezoid?




Yes     No

Is this polygon a trapezoid?



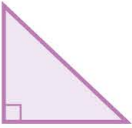
Yes     No

Is this polygon a trapezoid?



Yes     No

Is this polygon a trapezoid?



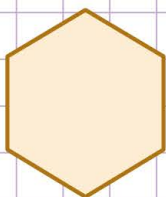
Yes     No

Is this polygon a trapezoid?



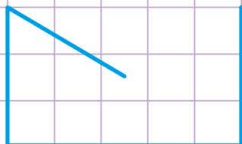
Yes     No

State whether the following shapes are a **trapezoid** or **not** and **why?**




**Trapezoid or not?** This shape is **not** a trapezoid.

**Why?** It is not a trapezoid because **it is not quadrilateral.**



**Trapezoid or not?** This shape is **not** a trapezoid.

**Why?** It is not a trapezoid because **it is not a closed shape.**



**Trapezoid or not?** This shape is **a** trapezoid.

**Why?** It is a trapezoid because **it is a quadrilateral and has a pair of parallel lines.**