

Name: Class:

Classify quadrilaterals

1. Is a square always a Rhombus?

yes no

2. Is a square a type of a rectangle?

yes no


3. Is a rectangle a type of a square?

yes no

4. Is a parallelogram always a trapezoid?


yes no

Is the shape below a rectangle?




Yes No

Is the shape below a trapezoid?




Yes No

Is the shape below a rectangle?




Yes No

Is the shape below a parallelogram?



Yes No

Is the shape below a rhombus?



Yes No

Name: Class:

Classify quadrilaterals

1. Is a square always a Rhombus?

yes no

2. Is a square a type of a rectangle?

yes no

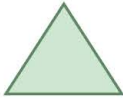
3. Is a rectangle a type of a square?

yes no

4. Is a parallelogram always a trapezoid?


yes no

Is the shape below a rectangle?




Yes No

Is the shape below a trapezoid?




Yes No

Is the shape below a rectangle?




Yes No

Is the shape below a parallelogram?



Yes No

Is the shape below a rhombus?



Yes No